

















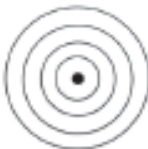

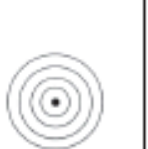







## Periodic Trends POGIL

### Model 1 – Main Group Elements

1 H 							2 He 
37							31
1312							2372
2.1							N/A
3 Li 	4 Be 	5 B 	6 C 	7 N 	8 O 	9 F 	10 Ne 
152	112	83	77	71	66	71	70
520	900	801	1086	1402	1314	1681	2081
1.0	1.5	2.0	2.5	3.0	3.5	4.0	N/A
11 Na 	12 Mg 	13 Al 	14 Si 	15 P 	16 S 	17 Cl 	18 Ar 
186	160	143	117	115	104	99	98
496	738	578	786	1011	1000	1251	1521
0.9	1.2	1.5	1.8	2.1	2.5	3.0	N/A
19 K 	20 Ca 	31 Ga 	32 Ge 	33 As 	34 Se 	35 Br 	36 Kr 
227	197	122	123	125	117	114	112
404	550	558	709	834	869	1008	1170
0.8	1.0	1.7	1.8	1.9	2.1	2.5	N/A

Atomic Number
Element Symbol
Electron Shell Diagram
Atomic Radius (pm)
1st Ionization Energy (kJ/mol)
Electronegativity

*Note:* The transition elements and f-block elements have been removed from the periodic table here to ease the analysis of the trends.

Topic/Objective:  Periodic Trends	Name:  Class Period:  Date:
---	---

Essential Question:

Can the properties of an element be predicted using a periodic table?

Notes:

The periodic table is often considered to be the “best friend” of chemists and chemistry students alike. It includes information about atomic masses and element symbols, but it can also be used to make predictions about atomic size, electronegativity, ionization energies, bonding, solubility, and reactivity. In this activity you will look at a few periodic trends that can help you make those predictions. Like most trends, they are not perfect, but useful just the same.

Atomic Radius

1. Consider the data in Model 1 on the previous page.
  - a. Each element has three numbers listed under it. Which value represents the atomic radius?
  - b. What are the units for the atomic radius?
  - c. Write a complete sentence to convey your understanding of atomic radius. Note: You may not use the word “radius” in your definition.
2. In general, what is the trend in atomic radius as you go down a group in Model 1? Support your answer, using examples from three groups.
3. Using your knowledge of Coulombic attraction and the structure of the atom, explain the trend in atomic radius that you identified in Question 2. Hint: You should discuss either a change in distance between the nucleus and outer shell of electrons or a change in the number of protons in the nucleus.
4. In general, what is the trend in atomic radius as you go across a period (left to right) in Model 1? Support your answer, using examples from two periods.
5. Using your knowledge of Coulombic attraction and the structure of the atom, explain the trend in atomic radius that you identified in Question 4.

Summary for this trend:

Topic/Objective:

Periodic Trends

Name:

Class Period:

Date:

Essential Question:

Can the properties of an element be predicted using a periodic table?

Notes:

### Ionization Energy

1. Locate the numbers in Model 1 that represent the ionization energy. The **ionization energy** is the amount of energy needed to remove an electron from an atom.
  - a. Using your knowledge of Coulombic attraction, explain why ionization—removing an electron from an atom—takes energy.
  - b. Which takes more energy, removing an electron from an atom where the nucleus has a tight hold on its electrons, or a weak hold on its electrons? Explain.
2. In general, what is the trend in ionization energy as you go down a group? Support your answer using examples from three groups.
3. Using your knowledge of Coulombic attraction and the structure of the atom, explain the trend in ionization energy that you identified in Question 7.
4. In general, what is the trend in ionization energy as you go across a period? Support your answer using examples from two periods.
5. Using your knowledge of Coulombic attraction and the structure of the atom, explain the trend in ionization energy that you identified in Question 9.
6. Atoms with loosely held electrons are usually classified as metals. They will exhibit high conductivity, ductility, and malleability because of their atomic structure. Would you expect metals to have high ionization energies or low ionization energies? Explain your answer in one to two complete sentences.

Summary for this trend:

Topic/Objective:

Periodic Trends

Name:

Class Period:

Date:

Essential Question:

Can the properties of an element be predicted using a periodic table?

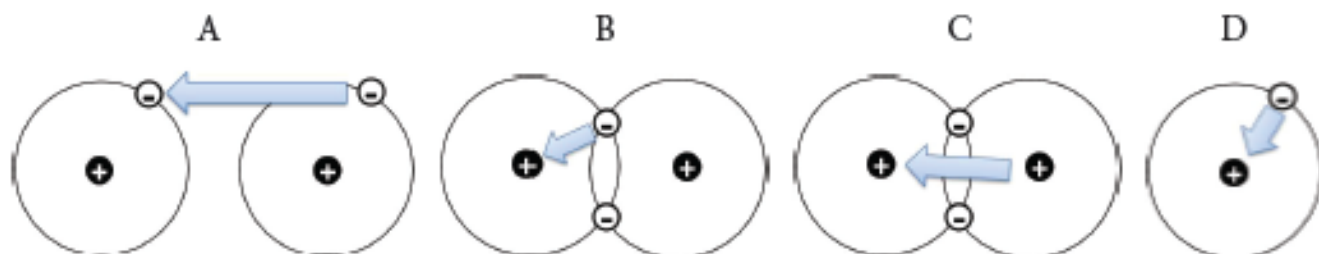
Notes:

Electronegativity

**Read This!**

**Electronegativity** is a measure of the ability of an atom's nucleus to attract electrons from a different atom within a covalent bond. A higher electronegativity value correlates to a stronger pull on the electrons in a bond. This value is only theoretical. It cannot be directly measured in the lab.

- Using the definition stated in the Read This! above, select the best visual representation for electronegativity. Explain your reasoning.

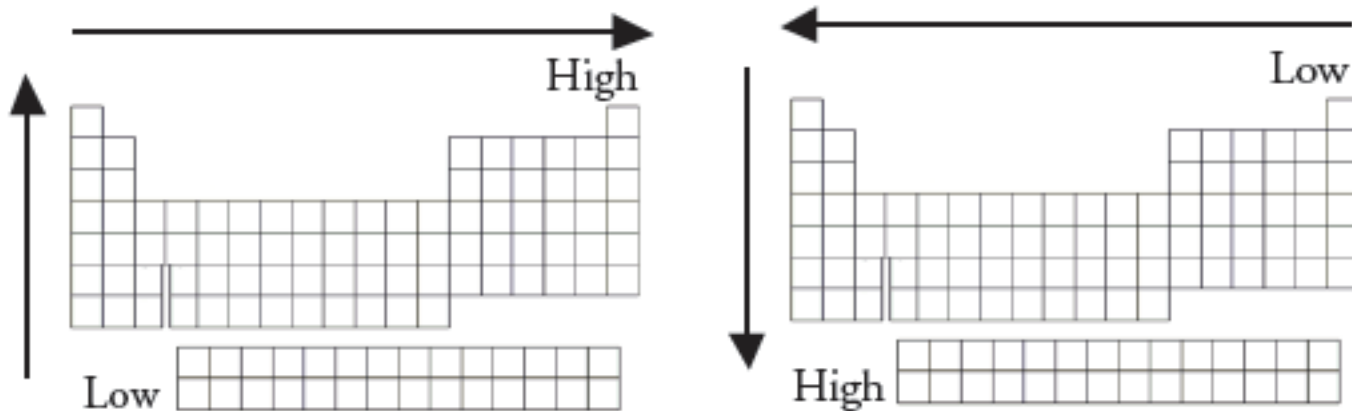


- Locate the electronegativity values in Model 1.
  - What is the trend in electronegativity going down a group in Model 1?
  - Explain the existence of the trend described in part a in terms of atomic structure and Coulombic attraction.
  - What is the trend in electronegativity going across a period in Model 1?
  - Explain the existence of the trend described in part c in terms of atomic structure and Coulombic attraction.

Summary for this trend:

## THE BIG IDEA

1. The two diagrams below can summarize each of the three trends discussed in this activity. Write “atomic radius,” “ionization energy,” and “electronegativity” under the appropriate diagram.



2. Rank the following elements from smallest to largest electronegativity based on the trends you have discovered thus far in the periodic table: barium (atomic number 56), bromine (atomic number 35), and iron (atomic number 26). Explain your reasoning.